

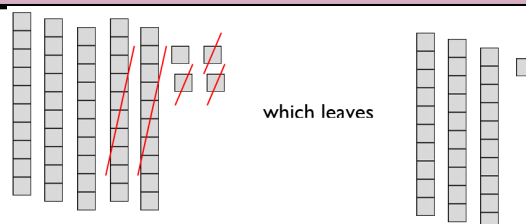


## What Should I Already Know?

Create an amount in base ten.

Take away an amount.

Count what is left.




which leaves

$$54 - 23 = 31$$

Draw an amount in base ten.

Take away an amount by crossing it out.

Count what is left.



## Vocabulary

subtract

take (away)

minus

leave

how many are left/left over?

how many have gone?

how many fewer is ... than ...?


how much less is ...?

difference between

distance between

## What do I need to know?

Use column subtraction with arrow cards and base ten.



80



9

-

50

7

Use column subtraction with base ten jottings.



80

→



9

-

50

→

7

30

→

2

=

32